

2nd Grade Homework: 1/5-1/8

Name: _____

Monday, 1/5:

- (1) Math - Addition with Regrouping**
- (2) ELA - Identify Short e: ea**
- (3) Science - Water Writing**
- (4) Social Studies - Producer or Consumer?**

Tuesday, 1/6:

- (1) Math - Addition with Regrouping**
- (2) ELA - Identify Short e: ea**
- (3) Social Studies - Producer or Consumer?**

Wednesday, 1/7

- (1) Math - Addition with Regrouping**
- (2) ELA - Identify Long e: y, ey**
- (3) Social Studies - Tomatoes: From Vine to You**

Thursday, 1/8:

- (1) Math - Subtraction with
Regrouping**
- (2) ELA - Contractions**

Announcements:

****Please read and log for twenty minutes each day.**

****1 story retell due by Friday**

Name _____

Addition With Regrouping

MONDAY

$$\begin{array}{r} 64 \\ + 38 \\ \hline \end{array}$$

$$\begin{array}{r} 88 \\ + 46 \\ \hline \end{array}$$

$$\begin{array}{r} 46 \\ + 55 \\ \hline \end{array}$$

$$\begin{array}{r} 79 \\ + 49 \\ \hline \end{array}$$

$$\begin{array}{r} 43 \\ + 37 \\ \hline \end{array}$$

$$\begin{array}{r} 37 \\ + 64 \\ \hline \end{array}$$

$$\begin{array}{r} 38 \\ + 56 \\ \hline \end{array}$$

$$\begin{array}{r} 85 \\ + 35 \\ \hline \end{array}$$

$$\begin{array}{r} 98 \\ + 24 \\ \hline \end{array}$$

Name _____ Date _____

Identify Short e: ea


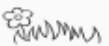

Find the word in the box that will finish each sentence. Write it on the line.

bread	breakfast	breath	ready	head
healthy	read	spread	heavy	weather

1. This morning, I had two slices of _____.
2. I _____ jam on each one.
3. Mom always says I should eat a good _____.
4. Last week, she _____ a book about eating well.
5. She wants me to be _____.
6. My Dad is a little too _____.
7. Some days he wears a hat on his _____.
8. Then he jogs in the park, but only in good _____.
9. Sometimes he gets out of _____.
10. That's when he says, "I am _____ to stop."

Directions: Please write about how water begins on a mountain and ends up in a lake or ocean.

Name: _____ Date: _____



Producer or Consumer?

A producer is someone who makes something. A consumer is someone who buys something. Look at the picture and check the box next to **producer** or **consumer**.

MONDAY



producer

☐

consumer

☐

producer

☐

consumer

☐

producer

☐

consumer

☐

producer

☐

consumer

☐

Regrouping

Name _____

Addition

TUESDAY

$$\begin{array}{r} 53 \\ + 29 \\ \hline \end{array}$$

$$\begin{array}{r} 65 \\ + 25 \\ \hline \end{array}$$

$$\begin{array}{r} 27 \\ + 34 \\ \hline \end{array}$$

$$\begin{array}{r} 52 \\ + 19 \\ \hline \end{array}$$

$$\begin{array}{r} 36 \\ + 55 \\ \hline \end{array}$$

$$\begin{array}{r} 26 \\ + 47 \\ \hline \end{array}$$

$$\begin{array}{r} 64 \\ + 36 \\ \hline \end{array}$$

$$\begin{array}{r} 49 \\ + 48 \\ \hline \end{array}$$

$$\begin{array}{r} 87 \\ + 17 \\ \hline \end{array}$$

Name _____ Date _____

Identify Short e: ea

TUESDAY

Draw a line to the word that answers each riddle. Then draw a circle around the letters that stand for the short e sound.

1. This is the opposite of *alive*.
 - lead
2. Some pipes are made of this.
 - leather
3. You use this to hem pants.
 - health
4. This keeps you warm.
 - weather
5. A doctor's job is to keep you in good _____.
 - dead
6. To know what to wear, you need this kind of report.
 - thread
7. Many belts are made of this.
 - sweater
8. This is a field of grassy land.
 - meadow

Name: _____

TUESDAY



Producer or Consumer?

Complete the sentences below using the words "producer" or "consumer."

1. A chef is a .
2. A girl buying a bike is a .
3. A fireman is a .
4. A teacher is a .
5. A lady buying a purse is a .

producer

consumer

producer

consumer

producer

Name _____

Addition With Regrouping

WEDNESDAY

$$\begin{array}{r} 37 \\ + 26 \\ \hline \end{array}$$

$$\begin{array}{r} 38 \\ + 43 \\ \hline \end{array}$$

$$\begin{array}{r} 55 \\ + 25 \\ \hline \end{array}$$

$$\begin{array}{r} 67 \\ + 34 \\ \hline \end{array}$$

$$\begin{array}{r} 29 \\ + 52 \\ \hline \end{array}$$

$$\begin{array}{r} 48 \\ + 43 \\ \hline \end{array}$$

$$\begin{array}{r} 36 \\ + 26 \\ \hline \end{array}$$

$$\begin{array}{r} 87 \\ + 25 \\ \hline \end{array}$$












$$\begin{array}{r} 45 \\ + 35 \\ \hline \end{array}$$

Name _____ Date _____

WEDNESDAY















Long e: y, ey

Draw lines to connect the opposites.

1. light
2. hard
3. clear
4. big
5. clean
6. full
7. sad
8. late
9. slow down
10. quiet

- tiny
- happy
- dirty
- empty
- heavy
- hurry
- noisy
- easy
- cloudy
- early

Name _____ Date _____


Tomatoes: From Vine to You

Complete the steps. Add words or pictures to show how fresh tomatoes become canned tomatoes.

Step 1:

A farmer grows tomatoes.

Step 2:




Step 3:

A worker sorts the tomatoes by size.

Step 4:

A worker packs canned tomatoes into boxes.

Step 5:



Subtracting 2-Digit Numbers with Regrouping

Use the empty boxes to subtract the following. One is solved for you.

$$\begin{array}{r} 417 \\ - 57 \\ \hline 39 \\ 18 \end{array}$$

$$\begin{array}{r} \\ - 91 \\ \hline 28 \\ \end{array}$$

$$\begin{array}{r} \\ - 70 \\ \hline 63 \\ \end{array}$$

$$\begin{array}{r} \\ - 31 \\ \hline 15 \\ \end{array}$$

$$\begin{array}{r} \\ - 72 \\ \hline 64 \\ \end{array}$$

$$\begin{array}{r} \\ - 34 \\ \hline 29 \\ \end{array}$$

$$\begin{array}{r} \\ - 81 \\ \hline 44 \\ \end{array}$$

$$\begin{array}{r} \\ - 41 \\ \hline 16 \\ \end{array}$$

$$\begin{array}{r} \\ - 80 \\ \hline 63 \\ \end{array}$$

$$\begin{array}{r} \\ - 63 \\ \hline 46 \\ \end{array}$$

$$\begin{array}{r} \\ - 51 \\ \hline 25 \\ \end{array}$$

$$\begin{array}{r} \\ - 60 \\ \hline 41 \\ \end{array}$$

$$\begin{array}{r} \\ - 40 \\ \hline 29 \\ \end{array}$$


$$\begin{array}{r} \\ - 32 \\ \hline 14 \\ \end{array}$$

$$\begin{array}{r} \\ - 63 \\ \hline 16 \\ \end{array}$$

$$\begin{array}{r} \\ - 74 \\ \hline 57 \\ \end{array}$$


Popcorn


CONTRACTIONS





Name _____


Write the contraction on the line.







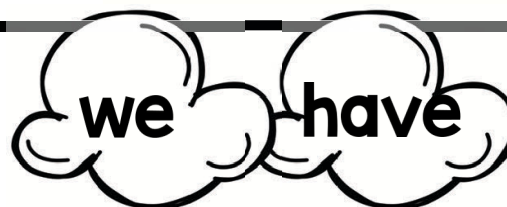












Second Grade Reading Log

Date	Title & Author	Pages Read	Minutes Read

Parent Signature (Week 1):

Parent Signature (Week 2):

*Please note, this log may be used for up to two weeks of reading.